



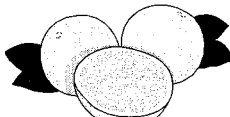




3.	What has been shared or divided into sets?	How many sets?	How many in each set?
a) 20 toys 4 toys for each child 5 kids		20 toys	5
b) 7 friends 21 pencils 3 pencils for each friend			
c) 16 students 4 desks 4 students at each desk			
d) 8 plants 24 flowers 3 flowers on each plant			
e) 6 grapefruits in each box 42 grapefruits 7 boxes			
f) 3 school buses 30 children 10 children in each school bus			
g) 6 puppies in each litter 6 litters 36 puppies			

**BONUS**



4. Draw a picture for Questions 3 a), b), and c) using circles for sets and dots for the things being divided.