









3.

	What has been shared or divided into sets?	How many sets?	How many in each set?
a) 24 toys 4 toys for each girl/boy 6 girls/boys 	24 toys	6	4
b) 8 children 32 crackers 4 crackers for each child 			
c) 18 flowers 3 bouquets 6 flowers in each bouquet 			
d) 9 trees 45 oranges 5 oranges in each tree 			
e) 8 apples in each pack 80 apples 10 packs 			
f) 6 taxis 24 passengers 4 passengers in each taxi 			
g) 35 cows 7 cows in each herd 5 herds 			
h) 7 litters 42 puppies 6 puppies in each litter 			



4. Draw a picture for Questions 3 a), b) and c) using circles for sets and dots for the things being divided.