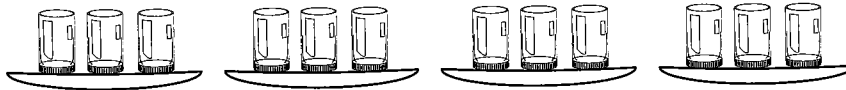


Elisa has 12 glasses of water. A tray holds 3 glasses.

There are 4 trays.



What has been shared or divided into sets or groups?

(Glasses)


How many sets are there?

(There are 4 sets of glasses.)

How many of the things being divided are in each set?

(There are 3 glasses in each set.)

1. a)




What has been shared or divided into sets?

How many sets? _____

How many in each set? _____

b)



What has been shared or divided into sets?

How many sets? _____

How many in each set? _____

2. Using circles for sets and dots for things, draw a picture to show...

a) 4 sets
6 things in each set

b) 6 groups
3 things in each group

c) 6 sets
2 things in each set

d) 4 groups
5 things in each group